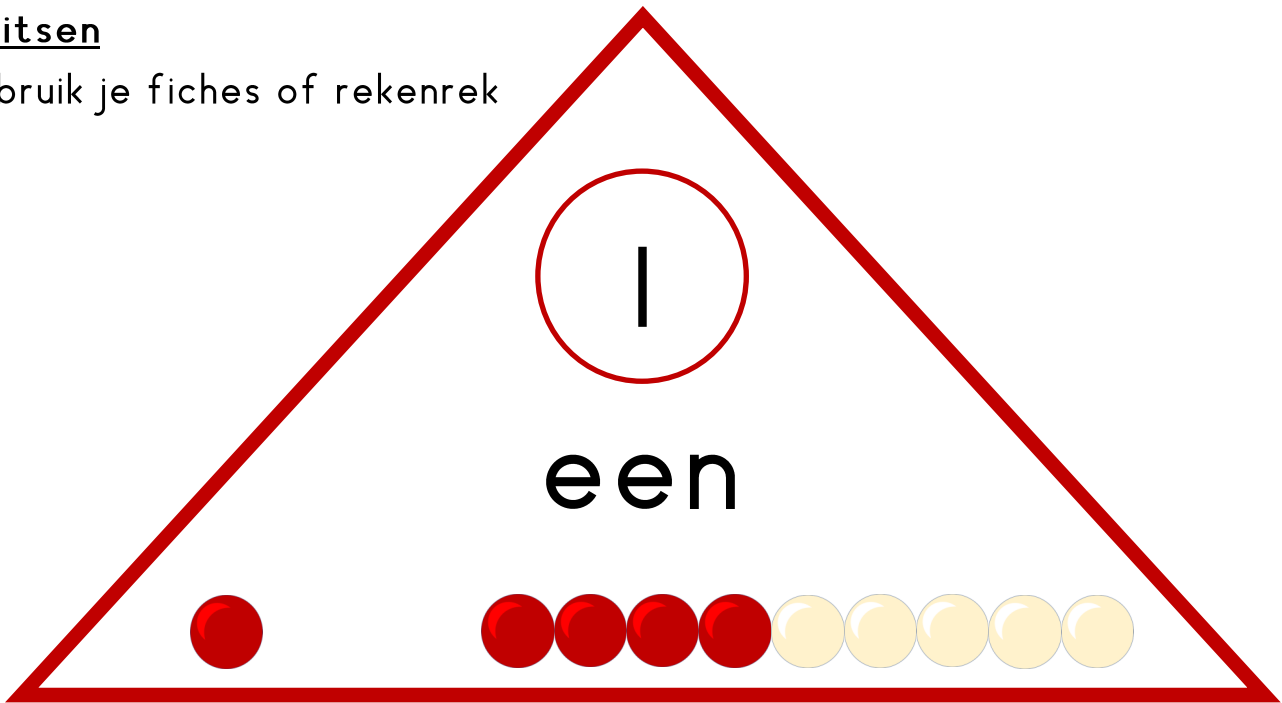


splitsen

gebruik je fiches of rekenrek



welke sommen kun je hiermee maken?

$+$   $=$

$-$   $=$

$+$   $=$


$-$   $=$

splitsen

gebruik je fiches of rekenrek

2

twee



welke sommen kun je hiermee maken?

2

$$+ =$$



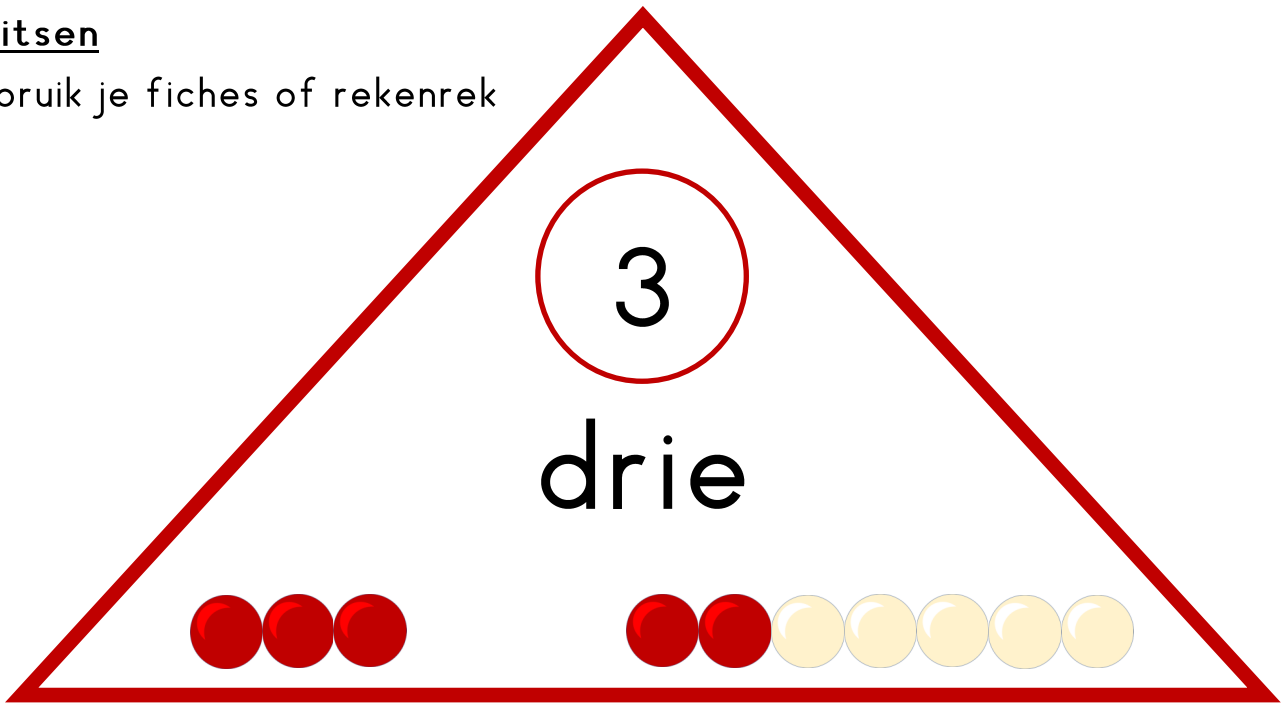
$$- =$$

$$+ =$$

$$- =$$

splitsen

gebruik je fiches of rekenrek



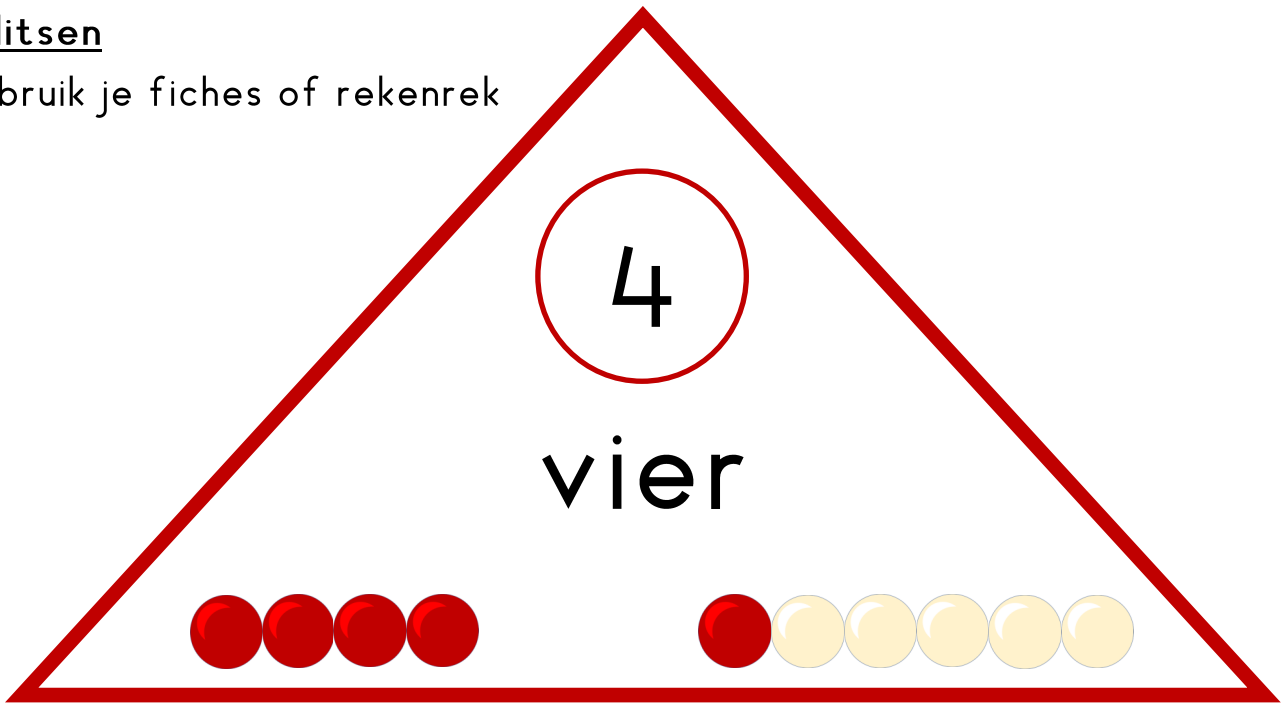
--	--

welke sommen kun je hiermee maken?

$+$ $=$	$\begin{matrix} \textcircled{3} \\ \swarrow \quad \searrow \\ \square \quad \square \end{matrix}$	$-$ $=$
$+$ $=$		$-$ $=$

splitsen

gebruik je fiches of rekenrek



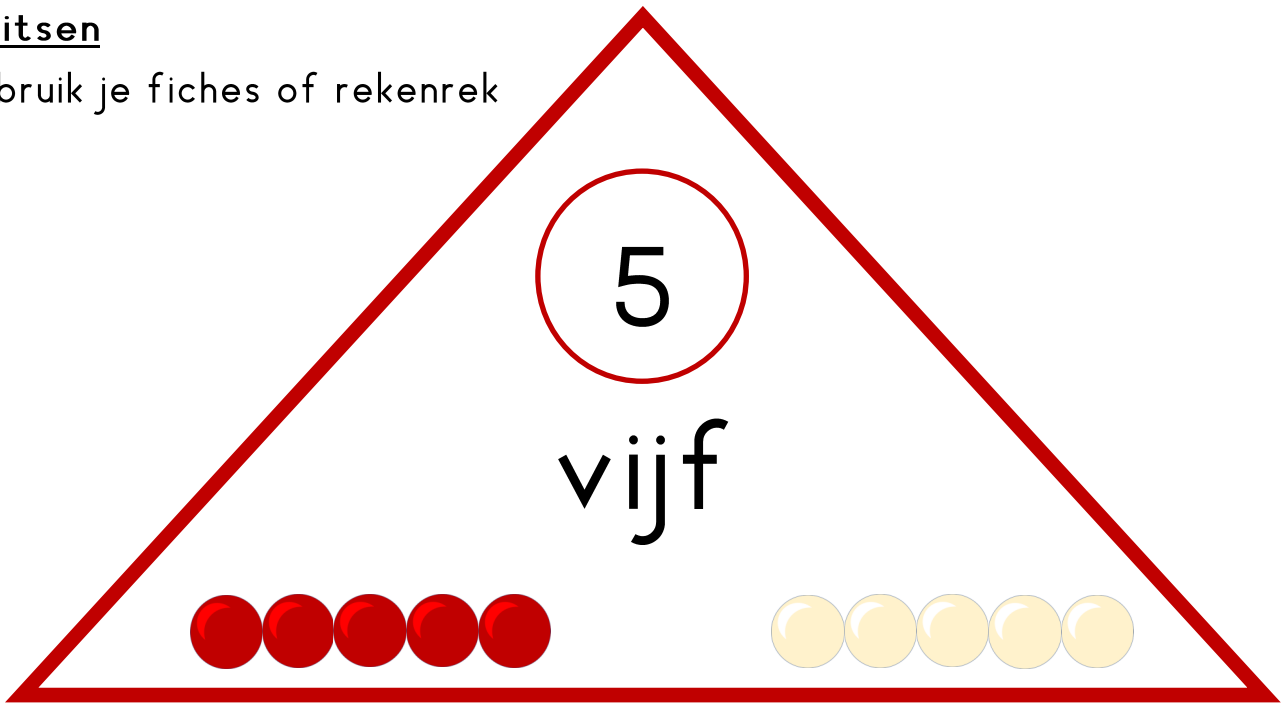
--	--

welke sommen kun je hiermee maken?

$+$ $=$	$4$ ↙    ↘ <input type="text"/> <input type="text"/>	$-$ $=$
$+$ $=$		$-$ $=$

splitsen

gebruik je fiches of rekenrek



--	--

welke sommen kun je hiermee maken?


$+$ $=$	$\begin{matrix} \textcircled{5} \\ \swarrow \quad \searrow \\ \square \quad \square \end{matrix}$	$-$ $=$
$+$ $=$		$-$ $=$

splitsen

gebruik je fiches of rekenrek

6

zes



welke sommen kun je hiermee maken?

6

$$+ =$$



$$- =$$

$$+ =$$

$$- =$$

splitsen

gebruik je fiches of rekenrek

7

zeven



welke sommen kun je hiermee maken?

7

$$+ =$$



$$- =$$

$$+ =$$


$$- =$$

splitsen

gebruik je fiches of rekenrek

8

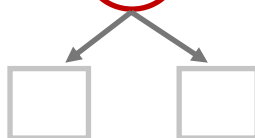
acht



welke sommen kun je hiermee maken?

8

$$\square + \square = \square$$



$$\square - \square = \square$$

$$\square + \square = \square$$

$$\square - \square = \square$$



splitsen

gebruik je fiches of rekenrek

9

negen



--	--

welke sommen kun je hiermee maken?


$+$ =	$\begin{array}{c} 9 \\ \swarrow \searrow \\ \square \quad \square \end{array}$	$-$ =
$+$ =		$-$ =

splitsen

gebruik je fiches of rekenrek

10

tien



welke sommen kun je hiermee maken?

10

$$+ =$$



$$- =$$

$$+ =$$

$$- =$$